
















Wie viel ist das?


Die Zeichen ersetzen verschiedene Zahlen. Schau sie dir genau an und versuche die Rechnungen zu lösen!

	= 1		= 6
	= 2		= 7
	= 3		= 8
	= 4		= 9
	= 5		= 10

a)  + 52 =

b) 23 +  =

c)  + 31 =

d) 45 +  =

e)  + 11 =

f)  + 26 +  =

g)  +  +  =

3+5=?

